

Please check the examination details below before entering your candidate information

Candidate surname					Other names				
Centre Number					Candidate Number				
<input type="text"/>	<input type="text"/>	<input type="text"/>	<input type="text"/>	<input type="text"/>	<input type="text"/>	<input type="text"/>	<input type="text"/>	<input type="text"/>	

Pearson Edexcel Level 1/Level 2 GCSE (9–1)

Wednesday 5 June 2024

Afternoon (Time: 1 hour 30 minutes)

Paper reference **1ST0/1F**

Statistics
PAPER 1
Foundation Tier

You must have:
Ruler graduated in centimetres and millimetres, protractor,
pair of compasses, pen, HB pencil, eraser, scientific calculator.

Total Marks

Instructions

- Use **black** ink or ball-point pen.
- **Fill in the boxes** at the top of this page with your name, centre number and candidate number.
- Answer **all** questions.
- Answer the questions in the spaces provided
– *there may be more space than you need.*
- Scientific calculators may be used.
- You must **show all your working out** with **your answer clearly identified** at the **end of your solution**.



Information

- The total mark for this paper is 80.
- The marks for **each** question are shown in brackets
– *use this as a guide as to how much time to spend on each question.*

Advice

- Read each question carefully before you start to answer it.
- Try to answer every question.
- Check your answers if you have time at the end.

Turn over ►

P75436A

©2024 Pearson Education Ltd.
F:1/1/1/1/1/1/



P 7 5 4 3 6 A 0 1 2 4








Pearson


Answer ALL questions.

Write your answers in the spaces provided.

You must write down all the stages in your working.

- 1 The incomplete pictogram gives information about the flavour and number of ice creams sold at Pradeep's cafe one Saturday morning.

Flavour	Number of ice creams
Vanilla	  
Strawberry	  
Chocolate	

Key:  represents 8 ice creams

20 chocolate ice creams were sold on Saturday morning.

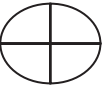
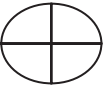

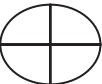




- (a) Complete the pictogram for the number of chocolate ice creams sold.

(1)

- (b) Work out the total number of ice creams sold on Saturday morning.

(2)

The pictogram below gives information about the flavour and number of ice creams sold at Pradeep’s cafe one Sunday morning.

Flavour	Number of ice creams
Vanilla	  
Strawberry	  
Chocolate	 

Key:  represents 20 ice creams

(c) Compare the number of vanilla ice creams sold in the cafe on Saturday morning with the number of vanilla ice creams sold in the cafe on Sunday morning.

Give a reason for your answer.

(2)

Pradeep wants to use the collected data to estimate how many ice creams of each flavour she will sell for the whole of next week.

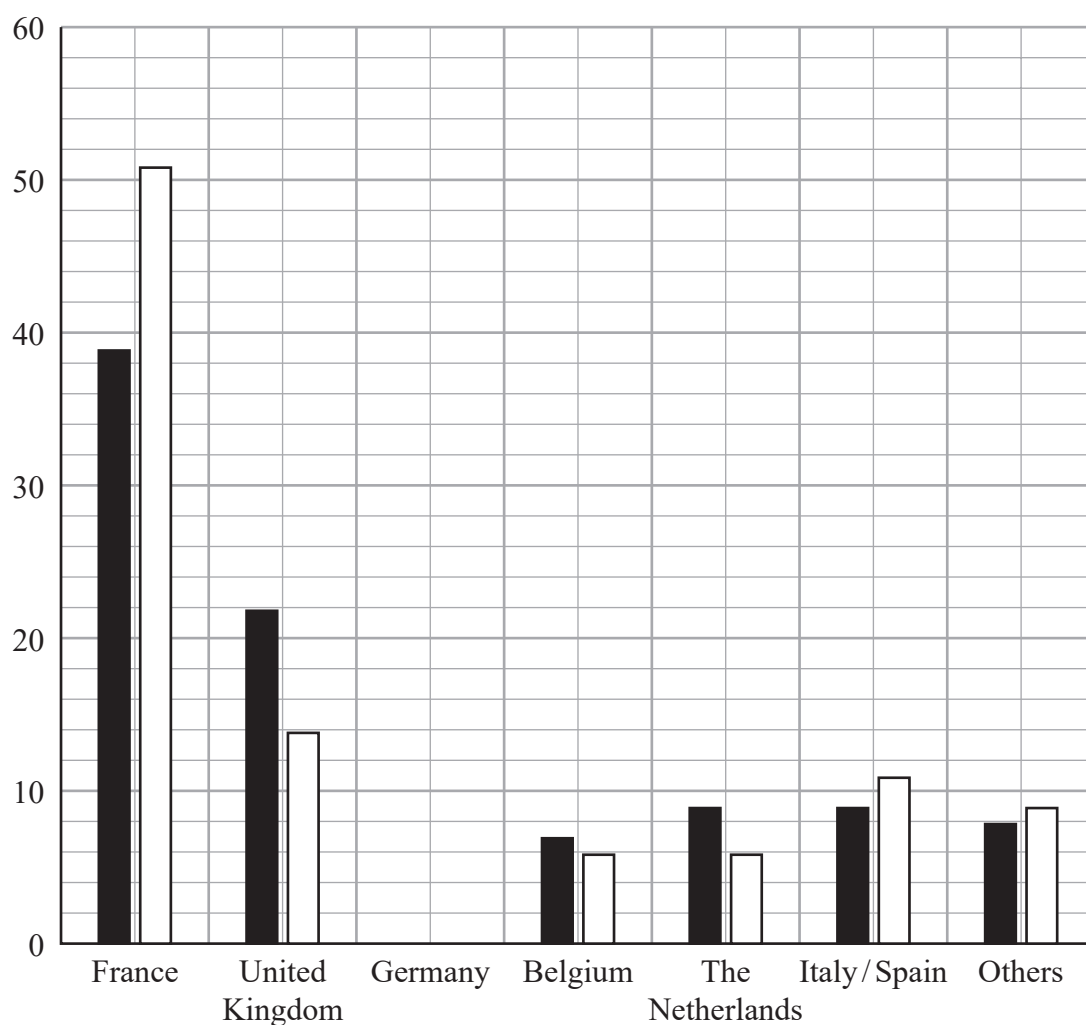
(d) Considering Pradeep’s data decide if this is appropriate.

(2)

(Total for Question 1 is 7 marks)



- 2 The incomplete multiple bar chart gives information about the home country of visitors to a theme park in 2003 and in 2013



Key: ■ 2003 □ 2013

(Source: <https://www.dlpguide.com/>)

In 2003, 39% of the visitors were from France.

- (a) (i) On the multiple bar chart complete the label for the horizontal axis.

(1)

- (ii) On the multiple bar chart complete the label for the vertical axis.

(1)



In 2003, 6% of the visitors were from Germany.
In 2013, 3% of the visitors were from Germany.

- (b) Complete the multiple bar chart for visitors from Germany.

(2)

- (c) Compare the change in the percentage of visitors to the theme park from France in 2003 and in 2013 with the change in the percentage of visitors to the theme park from the United Kingdom in 2003 and in 2013

(2)

John is investigating how the total number of visitors to the theme park has changed from 2003 to 2013

- (d) Comment on whether or not it is appropriate to use this multiple bar chart for his investigation.

(2)

(Total for Question 2 is 8 marks)



- 3 The tables show information about the number of episodes and viewing figures for two television programs, Emmerdale and Eastenders, for the years 2015 to 2018

Emmerdale	Total number of episodes	Highest viewing figure (millions)	Lowest viewing figure (millions)
Year			
2015	291	6.53	4.04
2016	308	8.03	4.95
2017	302	7.54	5.01
2018	119	7.72	5.72

Eastenders	Total number of episodes	Highest viewing figure (millions)	Lowest viewing figure (millions)
Year			
2015	209	9.87	5.43
2016	210	9.47	4.83
2017	209	8.41	4.19
2018	206	7.81	4.56

(Source: <https://eastenders.fandom.com/wiki/EastEndersWiki>
https://emmerdale.fandom.com/wiki/Emmerdale_Wiki)

- (a) (i) In which of these years did Eastenders have its greatest number of episodes?

.....
(1)

- (ii) What was the highest viewing figure for Emmerdale between 2015 and 2018?

..... million
(1)

- (b) Explain why the viewing figures in the table may not be accurate.

.....
(1)



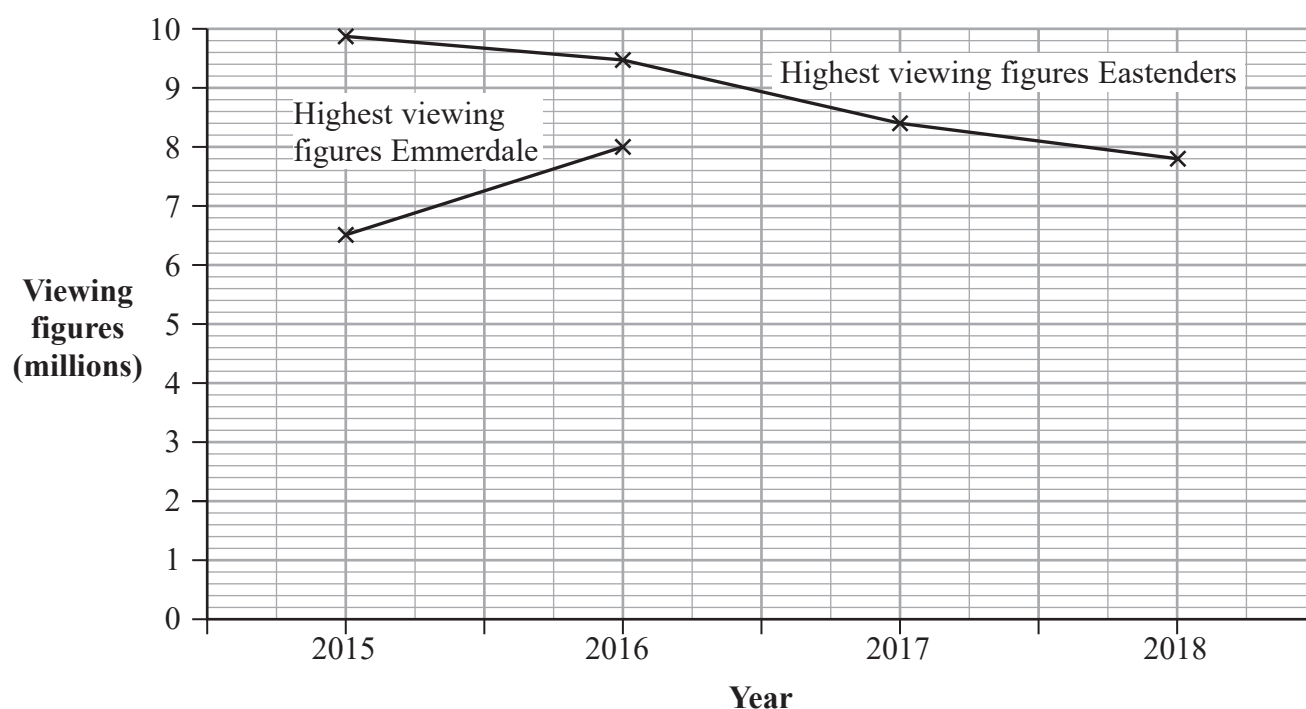
- (c) Compare the number of episodes for Emmerdale in 2016 with the number of episodes for Eastenders in 2016
Give a reason for your answer.

(2)

The incomplete graph shows the highest viewing figures for Emmerdale and for Eastenders between 2015 and 2018

- (d) Use the values for the highest viewing figures for Emmerdale from the table to complete the graph.

(2)



- (e) Describe the trend for the highest viewing figures for Eastenders between 2015 and 2018

(1)

(Total for Question 3 is 8 marks)



- 4 A basketball team played 9 matches at the start of a season.

The total number of points they scored in each match is listed below.

80 64 87 64 42 81 89 138 68

Here are some words used to describe data.

grouped

discrete

categorical

continuous

- (a) Select a word from the list to complete the sentence.

The total number of points scored in a match is an example

of data.

(1)

- (b) Work out the median score for these 9 matches.

.....
(2)

- (c) Give one advantage of using the median to summarise this data.

.....
.....
(1)

- (d) Work out the range of points for these 9 matches.

.....
(2)



The median and range for the final 9 matches of the season are shown in the table below.

Median	Range
90	25

- (e) Use your answers to part (b) and part (d) to compare the performance of the basketball team in the first 9 matches with the performance in the final 9 matches. Give **two** comparisons and interpret **both** in context.

.....

.....

.....

.....

.....

.....

.....

.....

.....

.....

(4)

(Total for Question 4 is 10 marks)

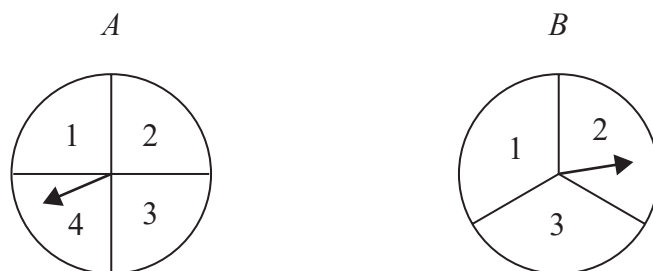
DO NOT WRITE IN THIS AREA

DO NOT WRITE IN THIS AREA

DO NOT WRITE IN THIS AREA



- 5 Carol spins the two spinners *A* and *B*.
She adds their scores together.



- (a) Complete the sample space diagram below to show all the possible totals.

		Score on spinner <i>B</i>		
		1	2	3
Score on spinner <i>A</i>	1			
	2		4	
	3			6
	4	5		

(2)

- (b) Assuming that the spinners are fair, find the probability

- (i) that the total score is 3,

.....
(1)

- (ii) that the spinners show the same score.

.....
(1)



Carol spins spinner A 120 times. The table below shows the scores that she got.

Score	Frequency
1	60
2	18
3	27
4	15

Carol concludes that spinner A is biased towards the number 1

(c) Assess whether or not Carol’s conclusion is appropriate.

(2)

(Total for Question 5 is 6 marks)

DO NOT WRITE IN THIS AREA



- 6 The manager of a gym is reviewing the current opening times of the gym.
The manager thinks that if the gym is open for more hours it will affect the number of people using the gym.

(a) Suggest a hypothesis that the manager could use.

(1)

The manager wants to get the opinions of the people who have a membership at the gym by giving them a questionnaire.

The manager obtains a numbered list of the 1500 people with a membership and decides to take a sample of 10% of the gym members.

The manager chooses the person who is numbered 0004 as the random starting point on the list and then picks every 20th person.

(b) Name the sampling method that the manager plans to use.

(1)

(c) (i) Give one reason why this is a good plan.

(1)

(ii) Will the manager's plan give a 10% sample of the gym members?
Give a reason for your answer.

(2)



Here is one of the questions that the manager is considering for the questionnaire.

“Do you agree that the gym should stay open for 24 hours a day?”

(d) Suggest two improvements to this question.

1

2

(2)

The manager decides to do a pre-test of the questionnaire by giving it to a small group of people.

(e) (i) What is it called when a questionnaire is tested in this way?

.....

(1)

(ii) Give **two** reasons why the manager might do this.

.....
.....
.....
.....

(2)

Following the full survey the manager concludes that if the gym is open for 24 hours a day it will not affect the number of people using the gym.

(f) Give a reason why it would also be appropriate for the manager to find the opinions of people who do **not** have a gym membership.

.....
.....

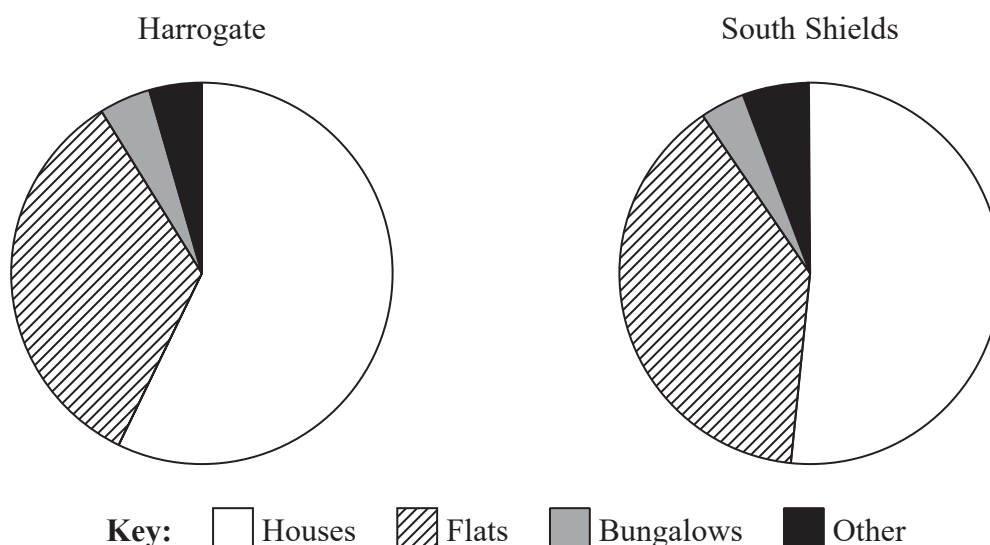
(1)

(Total for Question 6 is 11 marks)

.....



- 7 The pie charts give information about the different types of properties that were for sale in July 2020 in Harrogate and in July 2020 in South Shields.



(Source: www.rightmove.co.uk)

- (a) Compare the proportion of different types of properties for sale in Harrogate in July 2020 with the proportion of different types of properties for sale in South Shields in July 2020

(2)

Adam also drew two pie charts showing the different types of properties that were for sale in July 2021 in Harrogate and in July 2021 in South Shields.

Both pie charts have the same size angle for bungalows.
Adam uses this information to reach the following conclusion.

“The numbers of bungalows for sale in Harrogate in July 2021 and in South Shields in July 2021 were the same.”

- (b) Assess the validity of Adam’s conclusion.

(2)

(Total for Question 7 is 4 marks)

DO NOT WRITE IN THIS AREA

DO NOT WRITE IN THIS AREA

DO NOT WRITE IN THIS AREA

BLANK PAGE

Turn over for next question



- 8 A fjord is a deep and narrow part of a sea with steep land on three sides.

Emily is investigating the length of fjords in Norway.

She collects some data from the internet and puts the data into a grouped frequency table.

The grouped frequency table below shows information about the results she collected.

Length of fjord (l km)	Frequency
$0 \leq l < 50$	199
$50 \leq l < 100$	17
$100 \leq l < 150$	12
$150 \leq l < 200$	3
$200 \leq l < 250$	1

(Source: https://en.wikipedia.org/wiki/List_of_Norwegian_fjords)

- (a) Work out the number of fjords that have a length of at least 100 km.

.....
(2)

- (b) (i) Calculate an estimate of the mean length of these fjords.
Give your answer to 1 decimal place.

..... km
(3)



(ii) Explain why your answer to part (b)(i) is only an estimate.

(1)

(iii) How could Emily have improved the accuracy of her answer to part (b)(i)?

(1)

Emily plans to use a frequency polygon to represent the lengths of the fjords.

(c) Discuss whether or not a frequency polygon would be an appropriate diagram to use.

(2)

(Total for Question 8 is 9 marks)

DO NOT WRITE IN THIS AREA

DO NOT WRITE IN THIS AREA

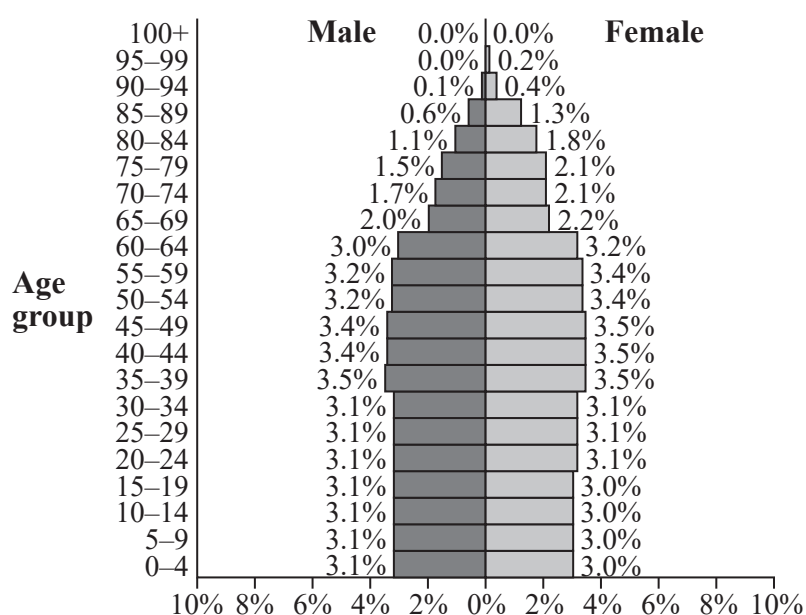
DO NOT WRITE IN THIS AREA



- 9 The two population pyramids give information about the percentage of the population who are male and who are female for each age group in France and in Italy in 2010

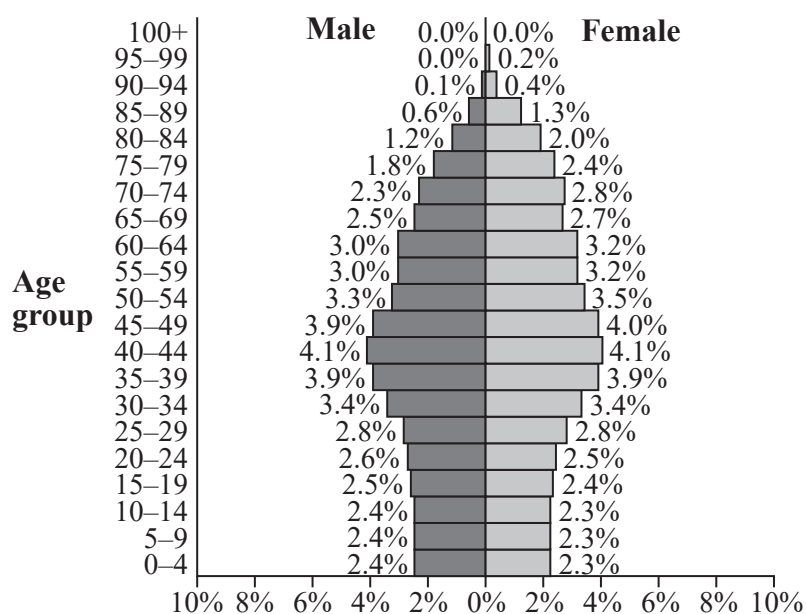
2010 France

Population 62 444 566



2010 Italy

Population 59 822 450



(Source: www.populationpyramid.net)



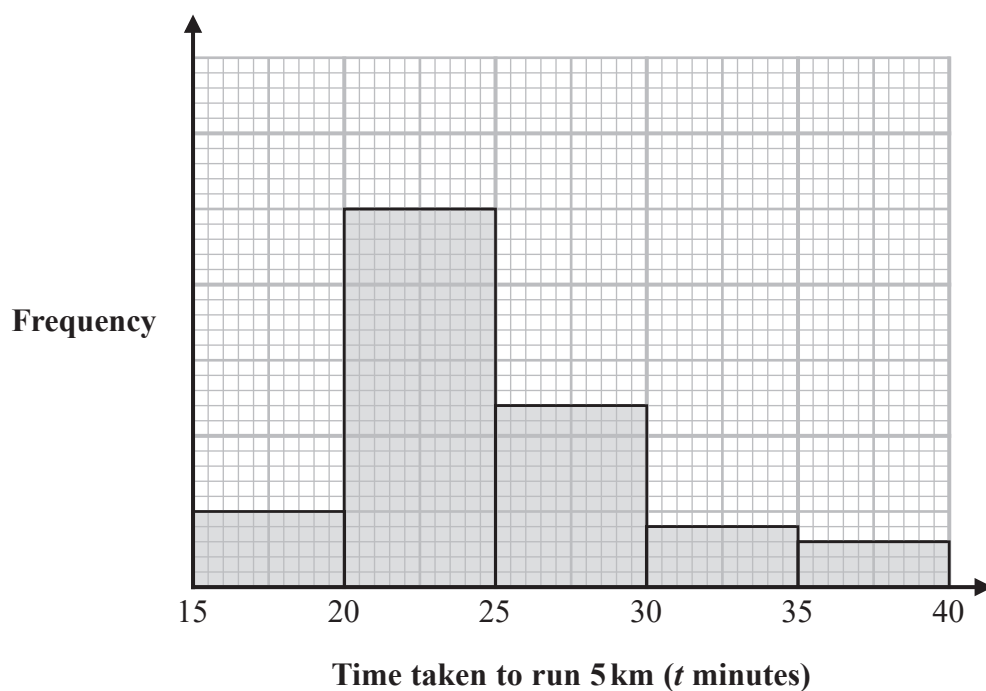
- The percentage of people aged 50–54 was lower in France than the percentage of people aged 50–54 in Italy.
- The number of males aged 40–44 in France was greater than the number of males aged 40–44 in Italy.

You should show clearly the value of any statistics you use in your answer.

(Total for Question 9 is 5 marks)



- 10 The time taken, in minutes, for some runners to complete a 5 km run was recorded. The incomplete histogram and incomplete grouped frequency table give information about the times taken, in minutes, for these runners to complete the 5 km run.



Time taken to run 5 km (t minutes)	Frequency
$15 < t \leq 20$	5
.....	25
$25 < t \leq 30$
$30 < t \leq 35$	4
$35 < t \leq 40$	3

(Source: www.parkrun.org.uk)

- (a) Use the information in the histogram to complete the table.

(2)



- (b) Estimate the number of runners that took less than or equal to 23 minutes to complete the race.

.....
(2)

- (c) Identify and interpret the skew shown on the histogram.

.....
.....
.....
(2)

(Total for Question 10 is 6 marks)

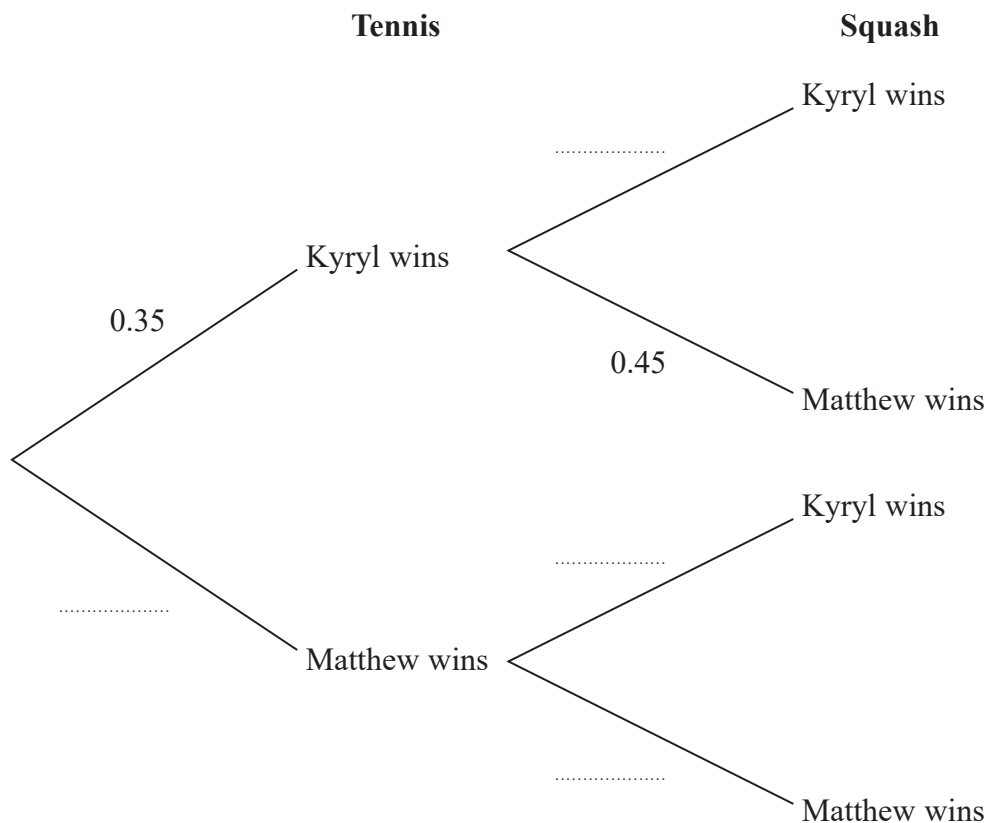


- 11 Kyryl and Matthew play against each other in a game of tennis and a game of squash. In each game either Kyryl or Matthew wins.

The probability that Kyryl wins the game of tennis is 0.35

The probability that Matthew wins the game of squash is 0.45

- (a) Complete the tree diagram to show this information.



(2)

- (b) Matthew says that the probability of him winning both games is greater than the probability of Kyryl winning both games.

Is Matthew correct?

You must show how you get your answer.

(4)

(Total for Question 11 is 6 marks)

TOTAL FOR PAPER IS 80 MARKS



DO NOT WRITE IN THIS AREA

DO NOT WRITE IN THIS AREA

DO NOT WRITE IN THIS AREA

BLANK PAGE



DO NOT WRITE IN THIS AREA

DO NOT WRITE IN THIS AREA

DO NOT WRITE IN THIS AREA

BLANK PAGE

